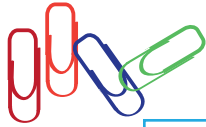


Stationery Math

Look at the price of each item. Then answer the questions below.



Paperclip

5 ¢



A set of crayons

35 ¢



Playdough

12 ¢



Marker

20 ¢




Scissors

45 ¢

1. Alex bought



and



. She gave you \$1. How much change would you give her?

2. Christy bought

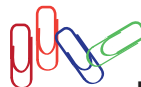


and



. She gave you \$1. How much change would you give her?

3. Brian bought



. He gave you \$2. How much change would you give him?

3. Paul bought



. He gave you \$2. How much change would you give him?